

BACHELOR OF COMPUTER APPLICATIONS (CBCS - 2018 COURSE)
B.C.A. Sem-V :SUMMER : 2023
SUBJECT : INTRODUCTION TO THE INTERNET TECHNOLOGIES

Day : Wednesday

Time : 02:00 PM-05:00 PM

Date : 3/5/2023

S-18787-2023

Max. Marks : 60

N.B.:

- 1) **Q.No.4** from Section-I is **COMPULSORY**.
 - 2) Figures to the right indicate **FULL** marks.
 - 3) Solve **ANY TWO** from **Q. No.1** to **Q. No.3** in **Section-I**.
 - 4) Solve **ANY TWO** from **Q. No.5** to **Q. No.7** in **Section-II**.
 - 5) Answers to both sections should be written in **SAME** answer book.
-

SECTION-I

- Q.1** a) Explain in brief concept of web server and web browser. (06)
- b) Explain the cols span and row span in table tag with proper example. (06)
- Q.2** a) What is CSS? Explain types of CSS with syntax and example. (06)
- b) List and explain the built in functions in Java Script. (06)
- Q.3** a) How to display web page from sever to client browser? (06)
- b) What is Domain? Explain the process of domain registration. (06)
- Q.4** Write short notes on **ANY THREE** of the following: (12)
- a) Frame tag
- b) Differentiate between Internet and Intranet
- c) Types of alert
- d) Uses of Java Script
- e) Conditional statements in Java Script

SECTION-II

- Q.5** Write a Java Script program to print factorial of given number (12)
- Q.6** Design a web page for user registration using input tags. (12)
- Q.7** Design a web page to demonstrate various types of list tags in HTML. (12)

* * * * *

BACHELOR OF COMPUTER APPLICATIONS (CBCS - 2018 COURSE)

B.C.A. Sem-V :SUMMER : 2023

SUBJECT : OBJECT ORIENTED ANALYSIS & DESIGN

Day : Saturday

Time : 02:00 PM-05:00 PM

Date : 6/5/2023

S-18788-2023

Max. Marks : 60

N.B.:

- 1) **Q. No. 4 is COMPULSORY.**
 - 2) Attempt **ANY TWO** questions from **Q.1 to Q.3**
 - 3) Attempt any **TWO** questions from **Q.5 to Q.7.**
 - 4) Figures to the right indicate **FULL** marks.
 - 5) Answer to both the sections should be written in **SAME** answer book.
-

SECTION – I

- Q.1** a) Explain static dimension of RUP. [06]
b) Explain various relationships used in UML. [06]
- Q.2** a) Write a brief use case for Hospital Management System. [06]
b) Draw a Sequence Diagram for attending a seminar online. [06]
- Q.3** a) Explain following concepts of activity diagram with example: [06]
i) Fork ii) Join iii) Swimlanes
b) Explain Component Diagram with suitable example. [06]
- Q.4** Write short notes on **ANY TWO** of the following: [12]
a) Object Orientation
b) Actors
c) Package Diagram
d) Advantages of UML

SECTION – II

- Q.5** List activities in admission process. Draw activity diagram with swimlanes for admission process for MCA course in government institute. [12]
- Q.6** Identify use cases and draw use case diagram for filing examination form online. [12]
- Q.7** Draw class diagram for online library management system. [12]

* * * *

.....
BACHELOR OF COMPUTER APPLICATIONS (CBCS - 2018 COURSE)

B.C.A. Sem-V :SUMMER : 2023

SUBJECT : C# PROGRAMMING

Day : Tuesday

Time : 02:00 PM-05:00 PM

Date : 9/5/2023

S-18789-2023

Max. Marks : 60

.....
N.B.:

- 1) **Q. No.4** from Section-I is **COMPULSORY**.
- 2) Answer **ANY TWO** questions from **Q. 1, Q. 2, and Q.3** in **Section-I**.
- 3) Answer **ANY TWO** questions from **Q. 5, Q. 6, and Q.7** in **Section-II**.
- 4) All questions carry **EQUAL** marks.
- 5) Answer to both the sections should be written in the **SAME** answer book.
- 6) Draw neat and labelled diagrams **WHEREVER** necessary.

SECTION-I

Q.1 Answer the following: **(6 x 2 = 12 marks)**

- a) Explain MS.NET framework. Bring out importance of CLR.
- b) Discuss the difference of value and reference type.

Q.2 Answer the following: **(6 x 2 = 12 marks)**

- a) How to declare interface? Explain in detail the implementation of interface with suitable example.
- b) Explain in detail data types available in C#.NET.

Q.3 Explain the following: **(6 x 2 = 12 marks)**

- a) What is meant by control array? Explain its use?
- b) Explain the working of garbage collection in .NET.

Q.4 Write short notes on **ANY THREE** of the following: **(4 x 3 = 12 marks)**

- a) Collection Object
- b) Constructor & their types
- c) Delegate
- d) COM

SECTION-II

Q.5 Answer the following: **(6 x 2 = 12 marks)**

- a) Write a C# program to sort the given array elements.
- b) Write a C# program to demonstrate operator overloading.

Q.6 Answer the following: **(6 x 2 = 12 marks)**

- a) Write a C# program to find the factorial of a given number.
- b) Write a C# program to print transpose of matrix.

Q.7 Explain the following: **(6 x 2 = 12 marks)**

- a) Write a C# program to find display multiplication table given number.
- b) Write a C# program to demonstrate use of copy constructor.

* * * * *

Day : Friday

Time : 02:00 PM-05:00 PM

Date : 12/5/2023

S-18790-2023

Max. Marks : 60

N.B.

- 1) Q.4 from Section – I is **COMPULSORY**.
- 2) Attempt **ANY TWO** questions from Q.1 to Q.3 from Section – I .
- 3) Attempt **ANY TWO** questions from Q.5 to Q.7 from Section – II .
- 4) Figures to the **RIGHT** indicate **FULL** marks.
- 5) Answers to both the sections should be written in the **SAME** answer book.
- 6) Draw neat and labelled diagram **WHEREVER** necessary.

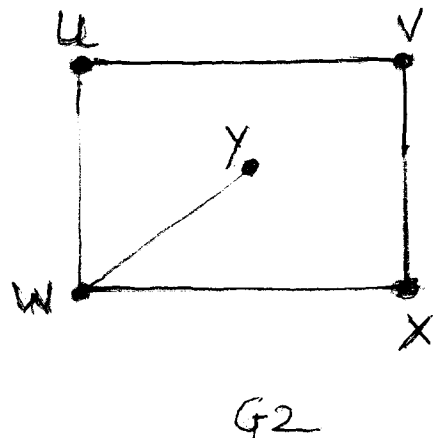
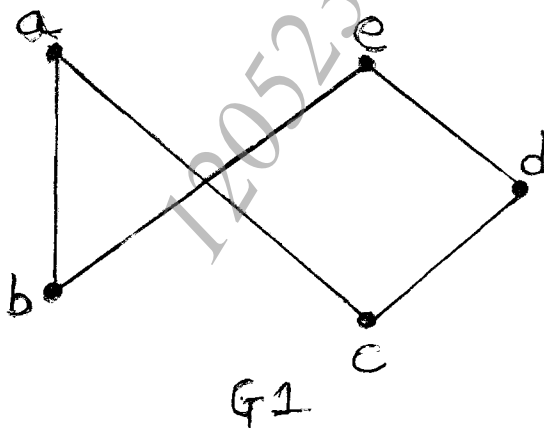
SECTION – I

- Q.1 Represent the following graph diagrammatically and explain in short: (12)
- a) Subgraph b) Bipartite graph c) Undirected graph.

- Q.2 a) Draw a diagram for $G = G(V, E)$ for (06)
- $V = \{a, b, c, d\}$, $E = [\{a, b\}, \{b, d\}, \{b, c\}, \{c, d\}, \{a, c\}, \{a, d\}]$

- b) Let G is a connected planar graph with 25 vertices and 60 edges. Find the (06)
- number of regions in G .

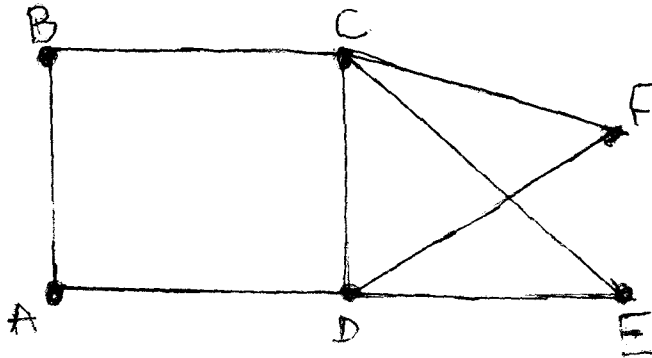
- Q.3 What is Isomorphism? Consider the following graphs and identify whether (12)
- given graphs are Isomorphic or not:



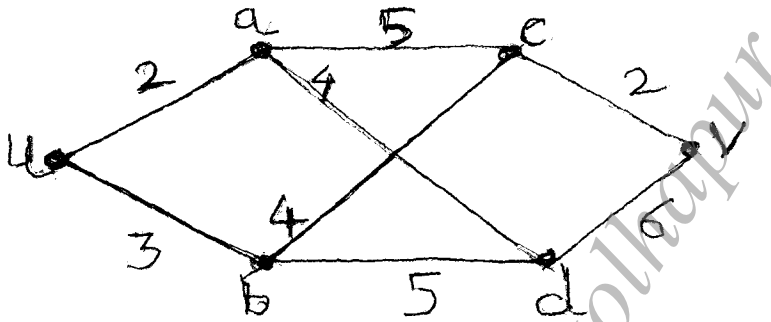
- Q.4 Write short notes on **ANY TWO** of the following: (12)
- a) Vertex Coloring and upper bounds
 - b) Seating arrangement problem
 - c) Maximum Bipartite Matching

SECTION – II

- Q.5** State and explain Fleury's algorithm . Using Fleury's algorithm, find the Euler's circuit for the graph given below: (12)



- Q.6** Find the shortest path from vertex 'u' using Dijkstra's algorithm. (12)



- Q.7** a) What is Planar Graph? Check whether $K_{2,3}$ is a Planar Graph or not. (06)
 b) State and explain Floyd's algorithm. (06)

* * * *

BACHELOR OF COMPUTER APPLICATIONS (CBCS - 2018 COURSE)
B.C.A. Sem-V :SUMMER : 2023
SUBJECT : E-COMMERCE

Day : Monday

Time : 02:00 PM-05:00 PM

Date : 15-05-2023

S-18791-2023

Max. Marks : 60

N.B :

- 1) **Q. No. 4 from Section – I is COMPULSORY.**
- 2) Answer **ANY TWO** questions from **Q. No. 1, 2, 3** in **Section – I.**
- 3) Answer **ANY TWO** questions from **Q. No. 5, 6, 7** in **Section – II.**
- 4) All questions carry **EQUAL** marks.
- 5) Answers to both sections should be written in **SAME** answer book.
- 6) Draw a labeled diagram **WHEREVER** necessary.

SECTION - I

- Q.1** Answer the following (6 marks x 2 = 12 marks)
- a) What is the concept of e-commerce? Elaborate the broad goals of e-commerce.
 - b) What are the different types of EDI? State the advantages of EDI.
- Q.2** Answer the following (6 marks x 2 = 12 marks)
- a) Explain in detail Business-to-Business (B2B) & Consumer-to-Consumer (C2C) business model of e-commerce.
 - b) Explain in detail process of e-payment system.
- Q.3** Answer the following (6 marks x 2 = 12 marks)
- a) Differentiate between e-commerce and traditional commerce.
 - b) Explain e-cash and debit card payment system of e-commerce.
- Q.4** Write short notes on **ANY THREE** of the following: (4 marks x 3 = 12 marks)
- a) Viruses
 - b) Application gateways
 - c) Mobile commerce
 - d) Online marketing
 - e) eBay.com
 - f) Smart card

SECTION - II

- Q.5** Answer the following (6 marks x 2 = 12 marks)
- a) Explain in detail e-commerce in Banking.
 - b) Write the concept and importance of Digital Signature.
- Q.6** Answer the following (6 marks x 2 = 12 marks)
- a) Explain in detail various security threats of e-commerce security.
 - b) What is Cryptography? Explain in detail types of Cryptography.
- Q.7** Answer the following (6 marks x 2 = 12 marks)
- a) What is Firewall? Explain in detail functions of Firewall.
 - b) Explain in detail Applications of e-commerce in Online Publishing.

* * * * *

BACHELOR OF COMPUTER APPLICATIONS (CBCS - 2018 COURSE)
B.C.A. Sem-V :SUMMER : 2023
SUBJECT : INTRODUCTION TO BIG DATA

Day : Monday
Date : 15-05-2023

S-22704-2023

Time : 02:00 PM-05:00 PM
Max. Marks : 60

N.B :

- 1) **Q. No. 4** from **Section – I** is **COMPULSORY**.
- 2) Solve **Any TWO** from **Q.No.1,2,3** in **Section – I**.
- 3) Solve **Any TWO** from **Q.No.5,6,7** in **Section – II**.
- 4) Figures to the right indicate **FULL** marks.
- 5) Answers to both sections should be written in **SAME** answer book.

SECTION - I

- Q.1** a) Explain Michael Porter's five forces analysis in detail. (06)
 b) Define Big Data. Explain Data Scientist roles and responsibilities. (06)
- Q.2** a) How does Big Data improve decision making process? (06)
 b) Discuss the case study of how does 'Amazon' use Big Data to increase product performance. (06)
- Q.3** a) Explain Unintelligent Use Experience in detail. (06)
 b) How Big Data architecture work explain with suitable diagram. (06)
- Q.4** Write short note on **ANY THREE** of the following: (12)
 a) Business Intelligence
 b) Weka
 c) Map Reduce
 d) Data Warehouse
 e) Business Transformation
 f) Ramification

SECTION - II

- Q.5** a) Explain Big Data Envisioning process in detail. (06)
 b) Discuss importance of Apache Hadoop for Big Data Analysis. (06)
- Q.6** a) Elaborate Data Analytics Life Cycle in detail. (06)
 b) What is KPI? Elaborate how Big Data Analytics improve Customer Engagement. (06)
- Q.7** a) How does Big Data can power a new customer experience? (06)
 b) Discuss how Big Data impacts business growth. (06)

* * * * *

Day : Monday

Time : 02:00 PM-05:00 PM

Date : 15-05-2023

S-22708-2023

Max. Marks : 60

N.B.

- 1) **Q. 4 From SECTION – I is COMPULSORY.**
- 2) Answer any **TWO** questions from Q. 1, 2, 3 in **SECTION - I**
- 3) Answer any **TWO** questions from Q. 5, 6, 7 in **SECTION – II**
- 4) **All Questions carry equal marks.**
- 5) Answer to both sections should be written in **SAME** answer book.
- 6) Draw a labeled diagram wherever necessary.

SECTION – I

Q. 1 Answer the following : (6 Marks x 2= 12 Marks) (12)

- a) What does Database Encryption and Decryption mean?
- b) What is Information Security? What is the importance of information security in an organization?

Q. 2 Answer the following: (6 Marks x 2= 12 Marks) (12)

- a) What is equipment failure? How you can prevent equipment failure?
- b) Discuss different Secure Coding Techniques with suitable example.

Q. 3 Answer the following: (6 Marks x 2= 12 Marks) (12)

- a) Describe Authentication and Authorization process with suitable example.
- b) Discuss necessity of fire protection in IT industries.

Q. 4 Write a short note on **ANY THREE** of the following: (4 Marks x 3= 12 Marks) (12)

- a) Network Threats
- b) ISO 27001
- c) VPN
- d) Database Security
- e) Data Integrity

SECTION - II

Q. 5 Answer the following: (6 Marks x 2= 12 Marks) (12)

- a) What is ITIL? Discuss ITIL Framework.
- b) Discuss how to manage Windows Operating System security.

Q. 6 Answer the following: (6 Marks x 2= 12 Marks) (12)

- a) What are the different steps to secure web application?
- b) What is confidentiality? Discuss steps to manage confidentiality in information security?

Q. 7 Answer the following: (6 Marks x 2= 12 Marks) (12)

- a) Define WLAN, What are the security issues in WLAN?
- b) What is continuous security testing? What are some common things to test during security testing?
